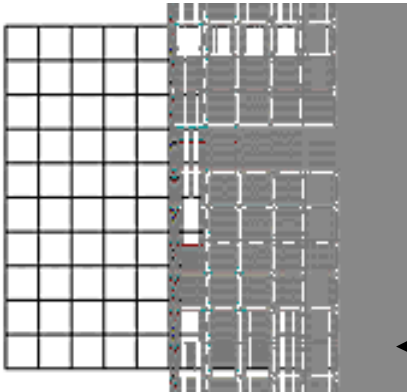


$$\frac{1}{10} \quad \text{—}$$

Fractions and Decimals

Model:



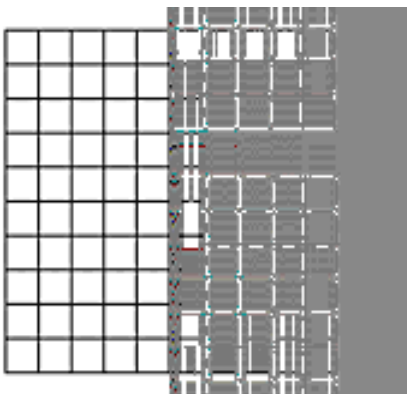
Fraction:

Decimal:

Number Line:



Model:



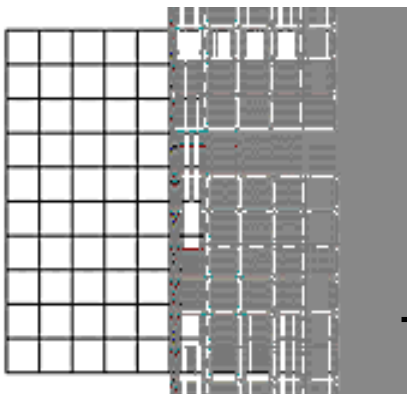
Fraction:

Decimal:

Number Line:



Model:



Fraction:

Decimal:

Number Line:



Warm-Up

$$\frac{1}{10}$$


Which decimal equals $\frac{1}{10}$

A 0.01

B 0.1

C 0.110

D 1.0



=